

# FronD Maths

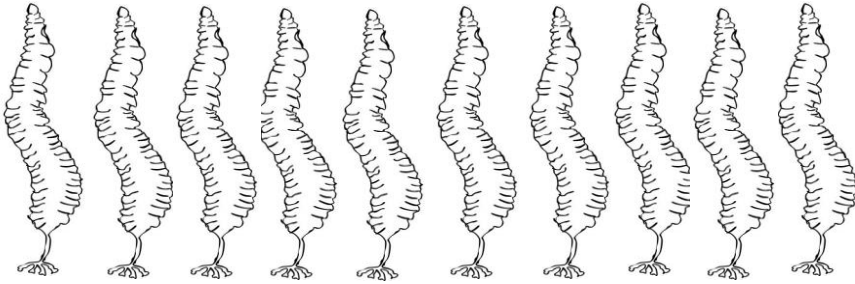
## Teacher Answer Sheet



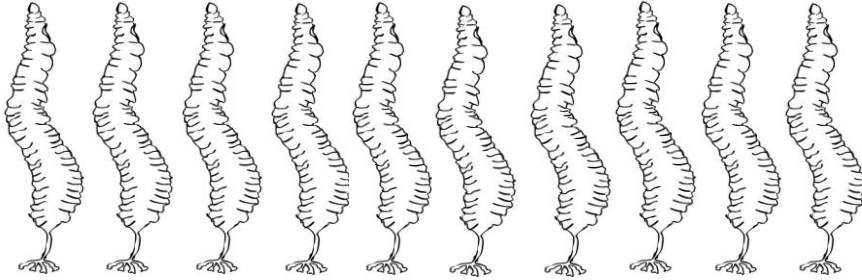
### Count and Colour

Read the number and colour the correct number of fronds in each row

**3**




**8**

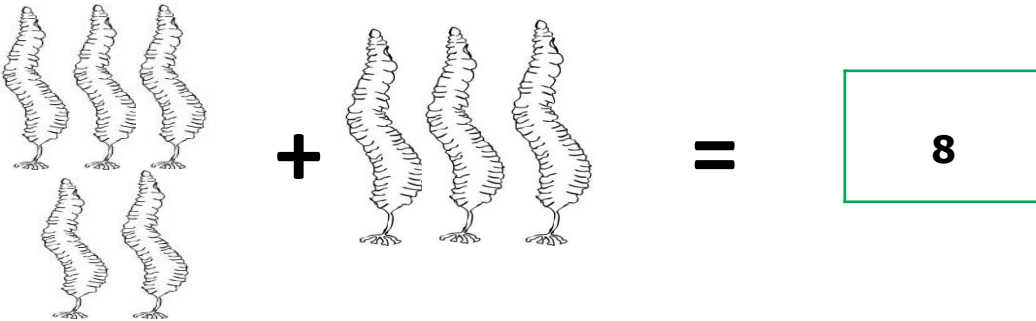


### FronD Addition

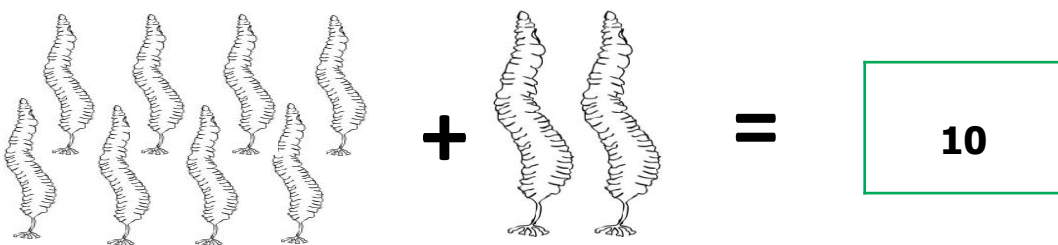
Write down the answers in the box



3 fronds + 2 fronds = 5 fronds



5 fronds + 3 fronds = 8 fronds



7 fronds + 3 fronds = 10 fronds

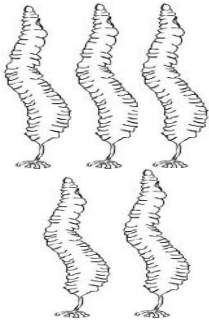
# Fronde Maths

## Teacher Answer Sheet



### Fronde Addition

Write down the answers in the box

 $5 + \boxed{5} = \boxed{10}$

$\boxed{12} + \text{3 fronds} = \boxed{15}$

 $8 + \boxed{4} = \boxed{12}$

$\boxed{4} + \text{4 fronds} = \boxed{8}$

 $7 + \boxed{1} = \boxed{8}$

$\boxed{12} + \text{8 fronds} = \boxed{20}$